



HAL
open science

Acyclic colourings of graphs with bounded degree

Mieczyslaw Borowiecki, Anna Fiedorowicz, Katarzyna Jesse-Jozefczyk,
Elzbieta Sidorowicz

► **To cite this version:**

Mieczyslaw Borowiecki, Anna Fiedorowicz, Katarzyna Jesse-Jozefczyk, Elzbieta Sidorowicz. Acyclic colourings of graphs with bounded degree. *Discrete Mathematics and Theoretical Computer Science*, 2010, Vol. 12 no. 1 (1), pp.59-74. 10.46298/dmtcs.483 . hal-00990426

HAL Id: hal-00990426

<https://inria.hal.science/hal-00990426v1>

Submitted on 13 May 2014

HAL is a multi-disciplinary open access archive for the deposit and dissemination of scientific research documents, whether they are published or not. The documents may come from teaching and research institutions in France or abroad, or from public or private research centers.

L'archive ouverte pluridisciplinaire **HAL**, est destinée au dépôt et à la diffusion de documents scientifiques de niveau recherche, publiés ou non, émanant des établissements d'enseignement et de recherche français ou étrangers, des laboratoires publics ou privés.

Acyclic colourings of graphs with bounded degree

Mieczysław Borowiecki Anna Fiedorowicz
Katarzyna Jesse-Józefczyk Elżbieta Sidorowicz

Faculty of Mathematics, Computer Science and Econometrics, University of Zielona Góra, Poland

{m.borowiecki, a.fiedorowicz, k.jesse-jozefczyk, e.sidorowicz}@wmie.uz.zgora.pl

received July 18, 2008, revised January 5, 2010, accepted February 16, 2010.

A k -colouring of a graph G is called *acyclic* if for every two distinct colours i and j , the subgraph induced in G by all the edges linking a vertex coloured with i and a vertex coloured with j is acyclic. In other words, there are no bichromatic alternating cycles.

In 1999 Boiron *et al.* conjectured that a graph G with maximum degree at most 3 has an acyclic 2-colouring such that the set of vertices in each colour induces a subgraph with maximum degree at most 2. In this paper we prove this conjecture and show that such a colouring of a cubic graph can be determined in polynomial time. We also prove that it is an NP-complete problem to decide if a graph with maximum degree 4 has the above mentioned colouring.

Keywords: acyclic colouring, subcubic graph

1 Introduction and notation

All graphs, which we consider, are finite and simple. For a graph G we denote its vertex set by $V(G)$ and its edge set by $E(G)$. The set of neighbours of a vertex $v \in V(G)$ is denoted by $N_G(v)$, or briefly by $N(v)$. Let $\Delta(G)$ denote maximum degree of G . Let $W \subseteq E(G)$. We denote by $G[W]$ the subgraph of G induced by the set W .

For any $k \geq 0$, we denote by \mathcal{S}_k the class of all graphs of maximum degree at most k . Furthermore, we say that a graph G is *subcubic* if $G \in \mathcal{S}_3$. Let \mathcal{D}_1 denote the class of all acyclic graphs.

A k -colouring of a graph G is a mapping c from the set of vertices of G to the set $\{1, \dots, k\}$ of colours. We can also regard a k -colouring of G as a partition of the set $V(G)$ into *colour classes* V_1, \dots, V_k such that each V_i is the set of vertices coloured with i .

Let $\mathcal{P}_1, \mathcal{P}_2, \dots, \mathcal{P}_k$ be nonempty classes of graphs. A k -colouring of a graph G is called a $(\mathcal{P}_1, \mathcal{P}_2, \dots, \mathcal{P}_k)$ -colouring of G if for every colour $1 \leq i \leq k$ the subgraph induced in G by the colour class V_i belongs to \mathcal{P}_i . Such a colouring is called an *acyclic* $(\mathcal{P}_1, \mathcal{P}_2, \dots, \mathcal{P}_k)$ -colouring, if for every two distinct colours i and j , the subgraph induced by all the edges linking a vertex coloured with colour i and a vertex coloured with colour j is acyclic. In other words, every bichromatic cycle in G contains at least one monochromatic edge. A bichromatic cycle (path) having no monochromatic edge will be called an *alternating cycle (path)*.

The acyclic $(\mathcal{P}_1, \mathcal{P}_2, \dots, \mathcal{P}_k)$ -colouring is called an *acyclic k -colouring* if for each i , $1 \leq i \leq k$, the class \mathcal{P}_i is the set of all edgeless graphs. The minimum k such that G has an acyclic k -colouring is called the *acyclic chromatic number of G* , denoted by $\chi_a(G)$.

The acyclic chromatic number and acyclic k -colouring have been investigated by many authors. In [7] Grünbaum showed that the acyclic chromatic number of any subcubic graph is at most 4. In [9] a linear time algorithm that uses at most 4 colours to acyclically colour vertices of such graph is presented. Burstein [4] proved that the acyclic chromatic number of graphs of maximum degree 4 is at most 5. In 1978 Kostochka [8] proved that it is an NP-complete problem to decide for a given graph G if $\chi_a(G) \leq 3$. Acyclic colourings of planar graphs, outerplanar graphs and graphs of maximum degree 5 were considered, see [2], [3], [5].

Boiron *et al.* studied the problem of acyclic $(\mathcal{P}_1, \dots, \mathcal{P}_k)$ -colourings of graphs. In [1] they proved that a subcubic graph G has an acyclic $(\mathcal{D}_1, \mathcal{S}_2)$ -colouring as well as an acyclic $(\mathcal{S}_1, \mathcal{S}_1, \mathcal{S}_1)$ -colouring. They also proved that any such G has an acyclic $(\mathcal{D}_1, \mathcal{D}_1)$ -colouring, provided G is neither $K_{3,3}$ nor K_4 . In the same paper it was conjectured that any subcubic graph has an acyclic $(\mathcal{S}_2, \mathcal{S}_2)$ -colouring. In Section 2 we verify this conjecture to be true. Moreover, this conjecture cannot be generalized for an arbitrary k , what shows the following theorem:

Theorem 1 *Let $k \geq 4$. Then there exists a graph with maximum degree k which has no acyclic $(\mathcal{S}_{k-1}, \mathcal{S}_{k-1})$ -colouring.*

Proof: Let us consider a graph $G = C_k + D_{k-2}$, where D_n denotes a graph without edges of order n and '+' stands for the join operation. Obviously, $G \in \mathcal{S}_k$.

Let us assume, to the contrary, that c is an acyclic $(\mathcal{S}_{k-1}, \mathcal{S}_{k-1})$ -colouring of G .

First observe, that if there is a pair of vertices $x, y \in V(C_k)$ such that x and y have the same colour, say colour 1, then at most one vertex $a \in V(D_{k-2})$ can have colour 2, since c is acyclic. Similarly, if for a pair of vertices $x', y' \in V(D_{k-2})$ we have $c(x') = c(y')$, then at most one vertex from $V(C_k)$ can have the colour different from $c(x')$. Therefore, if $k > 4$ then all vertices of C_k , except at most one, say z , must have the same colour, for example colour 1, and all vertices of D_{k-2} , except at most one, say z' , also must have colour 1. One can observe that at least one of the vertices z, z' also must have colour 1, to avoid alternating cycles of length four. But in this case there is a vertex v such that v and its k neighbours have the same colour, a contradiction.

In the case $k = 4$ it is easy to verify that if two vertices of C_4 have colour 1 and another two have colour 2, then one vertex of D_2 must have colour 1 and another one colour 2, to avoid alternating cycles of length four, but then we obtain an alternating cycle of length six, a contradiction.

On the other hand, if all the vertices of C_4 , except exactly one, have colour 1, then all the vertices of D_2 must have colour 1, to avoid alternating cycles, but then there is a vertex $z \in V(C_4)$ which has colour 1 and all of its four neighbours also have colour 1, a contradiction.

In the remaining case, if all vertices of C_4 have colour 1, then at least one vertex of D_2 also must have colour 1, to avoid an alternating cycle, but this vertex has four neighbours in colour 1, a contradiction. \square

The remainder of this paper is organised as follows. In the next section we show that any subcubic graph has an acyclic $(\mathcal{S}_2, \mathcal{S}_2)$ -colouring. In Section 3 we present a polynomial-time algorithm which produces an acyclic $(\mathcal{S}_2, \mathcal{S}_2)$ -colouring of any cubic graph. In Section 4 we prove that it is an NP-complete problem to decide if a given graph $G \in \mathcal{S}_4$ has an acyclic $(\mathcal{S}_2, \mathcal{S}_2)$ -colouring.

2 Acyclic $(\mathcal{S}_2, \mathcal{S}_2)$ -colourings of subcubic graphs

In this section we prove the following theorem:

Theorem 2 *For any subcubic graph there is an acyclic $(\mathcal{S}_2, \mathcal{S}_2)$ -colouring.*

We start with the following straightforward Lemma:

Lemma 1 *If $G \in \mathcal{S}_3$ then G has an $(\mathcal{S}_2, \mathcal{S}_2)$ -colouring.*

Remark 1 *Every subcubic graph has also an $(\mathcal{S}_1, \mathcal{S}_1)$ -colouring. Any 2-colouring of G with the maximum number of bichromatic edges is an $(\mathcal{S}_1, \mathcal{S}_1)$ -colouring of G .*

First we prove that any cubic graph has an acyclic $(\mathcal{S}_2, \mathcal{S}_2)$ -colouring. Let us consider a cubic graph G and its $(\mathcal{S}_2, \mathcal{S}_2)$ -colouring. If this colouring is not an acyclic $(\mathcal{S}_2, \mathcal{S}_2)$ -colouring, then there are vertices coloured such that they form an alternating cycle. We describe an algorithm which for a given alternating cycle C recolours vertices of G such that we obtain an $(\mathcal{S}_2, \mathcal{S}_2)$ -colouring in which vertices of C do not form any alternating cycle and no new alternating cycle appears.

Let G be an $(\mathcal{S}_2, \mathcal{S}_2)$ -coloured cubic graph and let C be an alternating cycle. Let $v \in V(C)$. If we change the colour of v , then C is not alternating. Now the graph G has fewer alternating cycles, because v has two vertices coloured with the same colour as it has, then there is no new alternating cycle, but we could create a monochromatic $K_{1,3}$. If we change the colour of its centre, then no new monochromatic $K_{1,3}$ appears, but in this case an alternating cycle could be formed. In our algorithm we destroy one forbidden structure and if our recolouring causes a creation of a new forbidden structure, then it will be destroyed in the next step.

First we describe the structures which can appear if we recolour vertices. Every forbidden structure is a coloured subgraph of cubic graph with two distinguished vertices: a root and a pre-root. The pre-root is the vertex whose colour will be changed.

Forbidden Structures

Structure (1) A monochromatic $K_{1,3}$ with the centre y which satisfies the following: let $N(y) = \{x_1, x_2, z\}$, the vertices x_1 and x_2 are connected by an alternating path and the vertex z has at least one neighbour coloured with colour other than $c(z)$. The root of the structure is the vertex y and the pre-root is the vertex x_1 or x_2 .

Structure (2) A monochromatic $K_{1,3}$ with the centre x which satisfies the following: there is a vertex $y \in N(x)$ such that y has exactly one neighbour z coloured with a colour other than $c(y)$. Moreover, z has two neighbours coloured with colour $c(z)$. The root of the structure is the vertex y and the pre-root is the vertex x .

Structure (3) Two monochromatic subgraphs $K_{1,3}$ one with the centre x the other with the centre y such that $x \neq y$ and the vertices x and y are adjacent. Moreover, there are two vertices $z_1, z_2 \in N(y) \setminus \{x\}$ which are connected by an alternating path. The root of the structure is the vertex y and the pre-root is the vertex x .

Structure (4) The set of alternating cycles C_1, C_2, \dots, C_k such that $\{x_1, y, x_2\} \subseteq V(C_1) \cap V(C_2) \cap \dots \cap V(C_k)$ and x_1, y, x_2 are three successive vertices of the cycles. The root of the structure is the vertex y and the pre-root is the vertex x_1 if it has a neighbour coloured with $c(x_1)$ outside the cycle, otherwise the pre-root is the vertex x_2 .

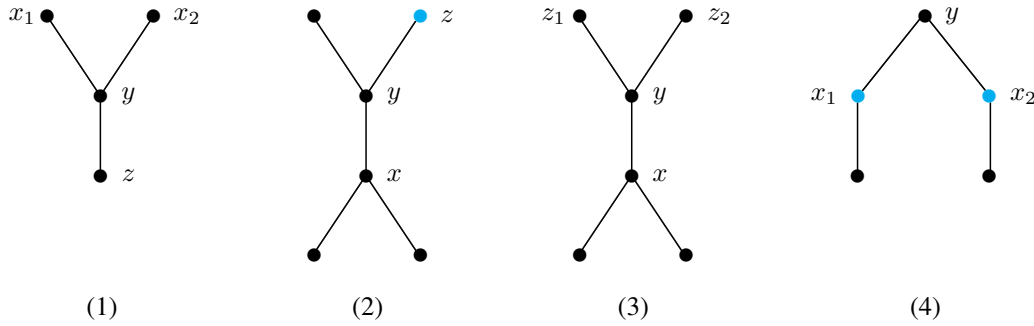


Fig. 1: Forbidden structures

Observation 1 Let G be a cubic graph whose vertices are coloured with two colours.

1. Suppose that the 2-colouring of G satisfies the following:

- (i) there is exactly one vertex y which has all neighbours coloured with the same colour as y and there is no other monochromatic $K_{1,3}$ and
- (ii) the vertex y is a root of Structure (1).

Let x be the pre-root of Structure (1) which has the root at y . Then after recolouring x either there is no alternating cycle containing x and there is no monochromatic $K_{1,3}$ in G or there is exactly one monochromatic $K_{1,3}$, which has the centre at x and forms Structure (2) with the root at the vertex x .

2. Suppose that the 2-colouring of G satisfies the following:

- (i) there is exactly one vertex x which has all neighbours coloured with the same colour and there is no other monochromatic $K_{1,3}$ and
- (ii) the vertex x is a pre-root of Structure (2).

Let y be the root of Structure (2) which has the pre-root at x . Then after recolouring x there is no monochromatic $K_{1,3}$ in G . Moreover, if new alternating cycles appear, then they form Structure (4) with the root at the vertex x and the vertex y is not contained in any of them.

3. Suppose that the 2-colouring of G satisfies the following:

- (i) there are exactly two monochromatic $K_{1,3}$, one with the centre in the vertex x and the other with the centre at the vertex y and
- (ii) the vertex x is a pre-root and the vertex y is a root of Structure (3).

Then after recolouring the pre-root x of this Structure (3) there is no monochromatic $K_{1,3}$ in G . Moreover, if new alternating cycles appear, then they form Structure (4) with the root at the vertex x and none of them contains the vertex y .

Observation 2 Let G be a cubic graph whose vertices are $(\mathcal{S}_2, \mathcal{S}_2)$ -coloured. Let C be an alternating cycle of G and $y \in V(C)$.

1. Let $x \in N(y) \setminus V(C)$ and $c(x) = c(y)$. If we change the colour of y then no monochromatic $K_{1,3}$ appears.
2. Let $x \in N(y) \setminus V(C)$ and $c(x) \neq c(y)$. If we change the colour of y then either
 - (i) there is exactly one monochromatic $K_{1,3}$, which has the centre at the vertex y and it forms Structure (1) or
 - (ii) there are exactly two monochromatic $K_{1,3}$: one with the centre at the vertex y , the other with the centre at the vertex x and they form Structure (3) with a pre-root at x and a root at y .

Moreover, vertices of C do not form any alternating cycle and no new alternating cycle appears in any of these cases.

Now we present an algorithm which recolours vertices of an $(\mathcal{S}_2, \mathcal{S}_2)$ -coloured cubic graph in such a way that the number of alternating cycles is decreased and the graph is still $(\mathcal{S}_2, \mathcal{S}_2)$ -coloured. We input a cubic graph G which is $(\mathcal{S}_2, \mathcal{S}_2)$ -coloured and a vertex v which is contained in an alternating cycle C . The algorithm returns an $(\mathcal{S}_2, \mathcal{S}_2)$ -colouring in which the vertices of C do not form any alternating cycle and no new alternating cycle appears. An ordering X contains the vertices which are recoloured during the execution of the algorithm, initially $X := \emptyset$. Every vertex in X is recoloured only once.

Reduction Algorithm

Input: a cubic graph G with an $(\mathcal{S}_2, \mathcal{S}_2)$ -colouring, a vertex v which is contained in an alternating cycle.

Output: a new $(\mathcal{S}_2, \mathcal{S}_2)$ -colouring of G .

1. $x := v$.
2. Change the colour of x .
3. Append x to X .
4. **If** there is a structure which has the root at the vertex x **then**
 - 4.1. **if** there is a structure in which the root is at the vertex x and the pre-root r is not in X **then** $x := r$ and go to 2;
 - 4.2. **else** find one vertex or two vertices such that after recolouring these vertices the structure is destroyed and no new structure appears.

To prove that the Reduction Algorithm is correct and decreases the number of alternating cycles we need the following properties of the ordering X :

Proposition 1 Let $X = \{v_1, v_2, \dots, v_t\}$.

- a) $v_1 = v$.
- b) If v_i was a root of Structure (1), then v_{i+1} was a root of Structure (2).

c) If v_i was a root of Structure (2), then v_{i+1} was a root of Structure (4).

d) If v_i was a root of Structure (3), then v_{i+1} was a root of Structure (4).

e) If v_i was a root of Structure (4), then v_{i+1} was a root of Structure (1) or (3).

Proposition 2 Let $X = (v_1, v_2, \dots, v_t)$. Then $v_i v_{i+1} \in E(G)$ for $i = 1, \dots, t - 1$.

Proposition 3 No three successive vertices of the ordering X are coloured with the same colour.

Proposition 4 Let $X = (v_1, v_2, \dots, v_t)$. If $c(v_{i-1}) \neq c(v_i)$ and $c(v_{i+1}) \neq c(v_i)$, then $c(v_{i-2}) = c(v_{i-1}) = c(v_{i+1}) = c(v_{i+2})$ for $i = 3, \dots, t - 2$.

Proposition 5 Let $X = (v_1, v_2, \dots, v_t)$.

a) If $c(v_i) = c(v_{i-1})$ and $w \in N(v_i) \setminus X$, then $c(w) = c(v_i)$ for $i = 2, \dots, t$.

b) If $c(v_i) = c(v_{i+1})$ and $w \in N(v_i) \setminus X$, then $c(w) \neq c(v_i)$ for $i = 1, \dots, t - 1$.

c) If $c(v_{i-1}) \neq c(v_i)$ and $c(v_{i+1}) \neq c(v_i)$ and $w \in N(v_i) \setminus X$, then $c(w) = c(v_i)$ for $i = 2, \dots, t - 1$.

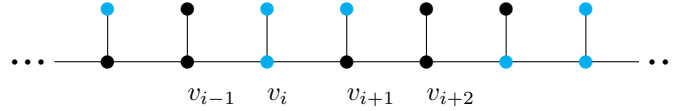


Fig. 2: Properties of the ordering X

Figure 2 illustrates the properties of the ordering X which are described in Propositions 4 and 5.

Proposition 6 Let $X = (v_1, v_2, \dots, v_t)$. Then one of the following conditions holds:

a) $c(v_1) = c(v_3) = c(v_4)$, $c(v_2) \neq c(v_1)$ and the vertices in $N(v_1) \setminus X$ are coloured with $c(v_1)$ and the vertices in $N(v_2) \setminus X$ are coloured with $c(v_2)$;

b) $c(v_1) = c(v_4)$, $c(v_2) = c(v_3)$, $c(v_2) \neq c(v_1)$ and the vertices in $N(v_1) \setminus X$ are coloured with $c(v_1)$ and the vertices in $N(v_2) \setminus X$ are coloured with a colour other than $c(v_2)$.

Lemma 2 Let G be a cubic graph whose vertices are $(\mathcal{S}_2, \mathcal{S}_2)$ -coloured. Let C be an alternating cycle of G and $v \in V(C)$. Then after execution of the Reduction Algorithm with the starting point in v we obtain an $(\mathcal{S}_2, \mathcal{S}_2)$ -colouring of G in which the vertex v is not contained in any alternating cycle and this colouring does not contain any new alternating cycle.

Proof: By Observation 2 we have that if we change the colour of the vertex v , then either we obtain an $(\mathcal{S}_2, \mathcal{S}_2)$ -colouring of G in which C is not alternating and no new alternating cycle appears or exactly one of Structures (1), (2) appears. From Observations 1 and 2 it follows that if we change the colour of a pre-root of any forbidden structure, then we destroy this structure and we obtain an $(\mathcal{S}_2, \mathcal{S}_2)$ -colouring of G which does not contain any new alternating cycle, or we obtain a monochromatic $K_{1,3}$, or alternating cycles which are contained in Structure (4). Thus to complete the proof it is sufficient to show that in step 4.2 there exist appropriate vertices, *i.e.*, the vertices such that after changing their colours the forbidden structure is destroyed and no new forbidden structure appears.

Let (v_1, v_2, \dots, v_t) be vertices of the ordering X such that v_t is a root of the forbidden structure which has the pre-root x belonging to X . Note that $v_1 = v$ and every vertex of X was recoloured only once. Let S be the forbidden structure which appears after recolouring the vertex v_t . Then v_t is a root of S and x is a pre-root of S . By Proposition 2 we have that v_t and x are adjacent. If $x \neq v_1$ then two neighbours of x are in X . By Proposition 3, in X there are no three successive vertices with the same colour, so that S is isomorphic neither to Structure (2) nor to Structure (3). By Proposition 6, $c(v_1) \neq c(v_2)$, so if $x = v_1$, then also S is isomorphic neither to Structure (2) nor to (3). Thus we will consider two cases: when S is isomorphic to Structure (1) and when S is isomorphic to Structure (4). Since $x \in X$, assume that $x = v_i$

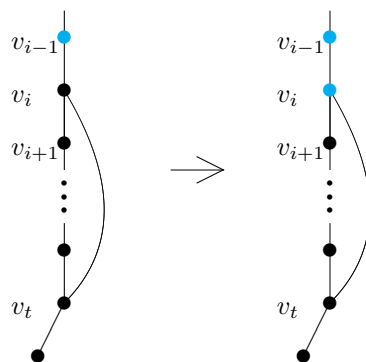


Fig. 3: Recolouring in Case 1

Case 1 S is isomorphic to Structure (1).

First note that $i \neq 1$, because by Proposition 6, the neighbours of v_1 which are not in X have the same colour as v_1 . Before v_t was recoloured it had a colour different from $c(v_1)$ and it was not in X , so the vertices v_1 and v_t cannot be adjacent.

Assume that $i \neq t - 1$.

In Structure (1) the root is a centre of the monochromatic $K_{1,3}$ and the pre-root is a leaf of $K_{1,3}$, hence vertices v_t and v_i have the same colour. Thus before the vertex v_t was recoloured, it had a colour other than v_i . Therefore, before vertex v_t was recoloured, the vertex v_i had a neighbour outside the ordering X (the vertex v_t) coloured with a colour other than $c(v_i)$. Thus from the properties of the ordering X it follows that $c(v_i) = c(v_{i+1})$ (Proposition 5b) and $c(v_{i-1}) \neq c(v_i)$ (Proposition 3).

In Structure (1) the pre-root is connected by an alternating path with the neighbour of the root, therefore there is an alternating path which starts at the vertex v_i and goes through the vertex v_{i-1} . Hence if we change the colour of v_i no new forbidden structure appears and the algorithm stops (Fig. 3).

Suppose now that $i = t - 1$. Since in Structure (1) there are two vertices x_1 and x_2 which can be a pre-root and the algorithm chooses as a pre-root the vertex v_{t-1} , it follows that both x_1 and x_2 are in X . Thus we can choose a vertex to recolouring similarly as in the case described above.

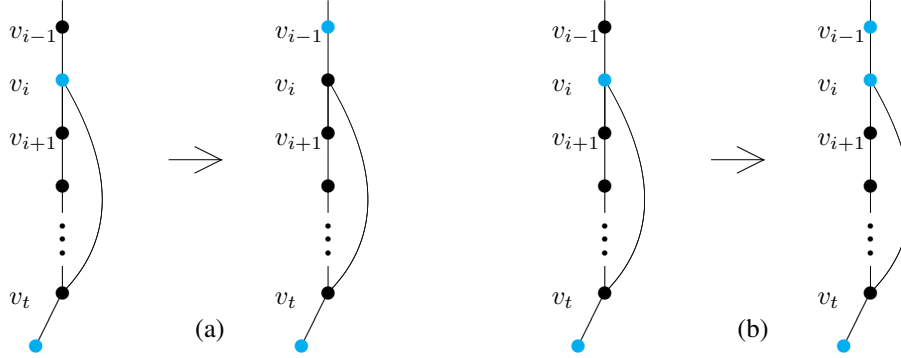


Fig. 4: Recolourings in Subcase 2.1

Case 2 S is isomorphic to Structure (4).

The pre-root of Structure (4) is contained in alternating cycles which also go through the vertex v_t . By Proposition 1 the vertex v_t was the pre-root of Structure (2) or (3) in which the root was v_{t-1} , hence there are no alternating cycles going through v_{t-1} . Therefore $i \neq t - 1$.

We first consider the case $i \neq 1$.

In Structure (4) the root and the pre-root are two successive vertices of an alternating cycle, therefore $c(v_t) \neq c(v_i)$. Thus before we recoloured the vertex v_t , it had the same colour as v_i . By Proposition 5 we have to distinguish two cases: one when $c(v_i) \neq c(v_{i+1})$ and $c(v_i) \neq c(v_{i-1})$ and the other when $c(v_i) \neq c(v_{i+1})$ and $c(v_i) = c(v_{i-1})$.

Subcase 2.1 $c(v_i) \neq c(v_{i+1})$ and $c(v_i) \neq c(v_{i-1})$.

From Proposition 4 it follows that $c(v_{i-2}) = c(v_{i-1}) = c(v_{i+2})$. Every alternating cycle of the structure S contains the root v_t and the pre-root v_i . Therefore, all these cycles contain the vertex v_{i-1} or v_{i+1} .

First suppose that both v_{i-1} and v_{i+1} have at most one neighbour coloured with their colour. Then at least one of the vertices v_{i-1} , v_{i+1} , say v_{i-1} , is contained in one of the alternating cycles of S . If we change the colour of v_i and v_{i-1} , then we destroy the structure S and no new structure appears, so the algorithm stops (Fig.4 (a)).

Assume now that only one of the vertices v_{i-1} , v_{i+1} has exactly one neighbour coloured with the same colour, say v_{i-1} has exactly one neighbour coloured with $c(v_{i-1})$ and v_{i+1} has two neighbours coloured

with $c(v_{i+1})$. Note that every alternating cycle of the structure S contains the vertex v_{i-1} . If we recolour the vertex v_{i-1} then we destroy S and no new structure appears, so the algorithm stops (Fig.4 (b)).

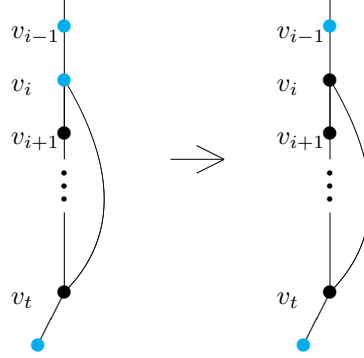


Fig. 5: Recolouring in Subcase 2.2

Subcase 2.2 $c(v_i) \neq c(v_{i+1})$ and $c(v_i) = c(v_{i-1})$.

Note that every alternating cycle of S contains the vertex v_{i+1} . If we recolour the vertex v_i then we destroy S and no new structure appears because now the vertex v_{i-1} has a colour other than $c(v_i)$. Thus the algorithm stops (Fig. 5).

Suppose now that $i = 1$. Since in Structure (4) there are two vertices x_1 and x_2 which can be a pre-root and the algorithm chooses as a pre-root the vertex v_1 , it follows that both x_1 and x_2 are in X . Thus we can choose vertices to recolouring similarly as in the previous case. \square

Lemma 3 For any cubic graph there is an acyclic $(\mathcal{S}_2, \mathcal{S}_2)$ -colouring.

Proof: Let G be a cubic graph. By Lemma 1, there is an $(\mathcal{S}_2, \mathcal{S}_2)$ -colouring of G . Suppose that there is no acyclic $(\mathcal{S}_2, \mathcal{S}_2)$ -colouring of G . Let c be an $(\mathcal{S}_2, \mathcal{S}_2)$ -colouring of G in which the number of alternating cycles is minimum. Let C be an alternating cycle and $v \in V(C)$. By Lemma 2, after execution of the Reduction Algorithm with the starting point in v we obtain an $(\mathcal{S}_2, \mathcal{S}_2)$ -colouring of G which has fewer alternating cycles than c , a contradiction. \square

Proof of Theorem 2: Let $G \in \mathcal{S}_3$. If G is a cubic graph then, by Lemma 3, the Theorem holds. Otherwise there is a cubic graph F such that $G \subseteq F$. Clearly, an acyclic $(\mathcal{S}_2, \mathcal{S}_2)$ -colouring of F is also an acyclic $(\mathcal{S}_2, \mathcal{S}_2)$ -colouring of G . \square

3 The complexity of acyclic $(\mathcal{S}_2, \mathcal{S}_2)$ -colourings of cubic graphs

In this section we present a polynomial algorithm which produces an acyclic $(\mathcal{S}_2, \mathcal{S}_2)$ -colouring of a cubic graph G of order n . In the algorithm we first find an $(\mathcal{S}_2, \mathcal{S}_2)$ -colouring of G . Then we find an alternating cycle and using the Reduction Algorithm we recolour the vertices of G to destroy this alternating cycle in such a way that the graph G is still $(\mathcal{S}_2, \mathcal{S}_2)$ -coloured. To find an alternating cycle we use the following function:

Function Cycle(v)

Input: a cubic graph G with a 2-colouring, a vertex v .

Output: an alternating cycle C containing v or a message that such a cycle does not exist.

1. $G' := G[W]$, where $W \subseteq E(G)$ is the subset of bichromatic edges.
2. $T :=$ the BFS tree of the graph G' with the root in v .
3. Let v_1, v_2, v_3 be the neighbours of v .
4. $V_l :=$ the set of descendants of v_l in T , for $l = 1, 2, 3$.
5. **If** there is an edge $xy \in E(G')$ such that $x \in V_l, y \in V_{l'}$ and $l \neq l'$ **then**
 - 5.1. $C :=$ the cycle of the graph $T + xy$;
 - 5.2. output the cycle C .
6. **else** output the message that there are no alternating cycles containing v .

We can also use Function Cycle in step 4.1 of the Reduction Algorithm to determine whether the graph contains Structure (4). The algorithm works as follows:

Colour Acyclic Algorithm

Input: a cubic graph G of order n .

Output: an acyclic $(\mathcal{S}_2, \mathcal{S}_2)$ -colouring of G .

- I Find an $(\mathcal{S}_2, \mathcal{S}_2)$ -colouring of G .
- II Mark each vertex of G as not visited.
- III **For** each vertex v which is not visited **do**
 - A. use Function Cycle(v) to decide whether there is an alternating cycle C containing v ;
 - B. **if** there is an alternating cycle C containing v **then** apply the Reduction Algorithm with the starting point in v to obtain an $(\mathcal{S}_2, \mathcal{S}_2)$ -colouring of G such that the vertices of C do not form an alternating cycle and no new alternating cycle appears;
 - C. mark v as visited.

Theorem 3 *There is a polynomial algorithm which produces an acyclic $(\mathcal{S}_2, \mathcal{S}_2)$ -colouring of a cubic graph.*

Proof: We discuss the running time of the Colour Acyclic Algorithm and we show that it is $O(n^3)$, where n is the order of the input graph. Step I can be done due to Lemma 1. Moreover, it is easy to observe that a simple, iterative algorithm produces such a colouring in $O(n)$ time. Clearly, Function Cycle(v) takes $O(n)$ time. By Lemma 2, we have that after visiting each vertex v of G at most once and executing the Reduction Algorithm with the starting point in v , we obtain an acyclic $(\mathcal{S}_2, \mathcal{S}_2)$ -colouring of G .

We now estimate the time complexity of the Reduction Algorithm. Finding a forbidden structure in step 4 takes $O(n)$ time (we use Function Cycle to find Structure (4), Structures (1)–(3) can be found in $O(1)$ time). The loop is iterated at most n times. From the proof of Lemma 2, it follows that step 2 can be implemented to run in $O(1)$ time. Thus, on the whole, the Colour Acyclic Algorithm takes $O(n^3)$ time. \square

4 Acyclic $(\mathcal{S}_2, \mathcal{S}_2)$ -colourings of graphs from \mathcal{S}_4

By Theorem 1 we have that there are graphs with maximum degree 4 which do not have any acyclic $(\mathcal{S}_2, \mathcal{S}_2)$ -colouring. We show that it is an NP-complete problem to decide if a graph with maximum degree 4 has an acyclic $(\mathcal{S}_2, \mathcal{S}_2)$ -colouring, *i.e.*, we prove the following:

Theorem 4 *The recognition of graphs having an acyclic $(\mathcal{S}_2, \mathcal{S}_2)$ -colouring for graphs with maximum degree 4 is NP-complete.*

Before we present the proof, let us consider several graphs. First of all the graph B . It is easy to see that B has an acyclic $(\mathcal{S}_2, \mathcal{S}_2)$ -colouring.

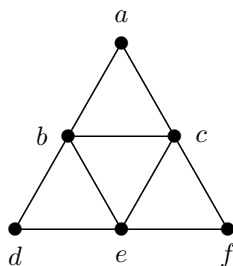


Fig. 6: The graph B

Lemma 4 *For every acyclic $(\mathcal{S}_2, \mathcal{S}_2)$ -colouring of the graph B , one colour class induces the graph K_3 and the second induces the graph P_3 .*

Proof: Suppose first that b, c, e are coloured with the same colour. Then all the other vertices must be coloured with the other one. But then there is an alternating cycle induced by the vertices a, b, c, d, e, f . Suppose now, without loss of generality, that e is coloured with colour 1 and b, c are coloured with colour 2. Then a must be coloured with colour 2 since otherwise the vertices a, b, c, e would induce an alternating

cycle. That implies that the vertices d and f are coloured with colour 1 (because the vertices b, c have now two neighbours coloured with colour 2). Obviously we obtained an acyclic $(\mathcal{S}_2, \mathcal{S}_2)$ -colouring of the graph and the set of vertices coloured with colour 1 induces P_3 and the set of vertices coloured with colour 2 induces K_3 . \square

Let us now take a quick look on the graph $G(C_j)$, which includes the graph B as an induced subgraph.

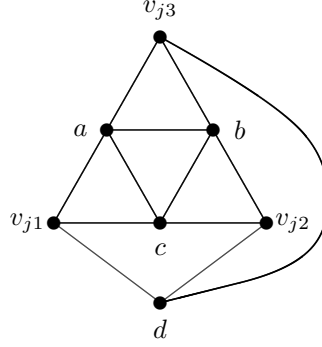


Fig. 7: The graph $G(C_j)$

Observation 3 *The graph $G(C_j)$ has an acyclic $(\mathcal{S}_2, \mathcal{S}_2)$ -colouring and the maximum degree of $G(C_j)$ is 4.*

From Lemma 4 the next one follows.

Lemma 5 *There does not exist an acyclic $(\mathcal{S}_2, \mathcal{S}_2)$ -colouring of the graph $G(C_j)$ such that v_{j1}, v_{j2}, v_{j3} are in the same colour class.*

Lemma 6 *Any non-monochromatic 2-colouring of the vertices v_{j1}, v_{j2}, v_{j3} can be extended to an acyclic $(\mathcal{S}_2, \mathcal{S}_2)$ -colouring of the graph $G(C_j)$.*

Proof: The graph B is an induced subgraph of the graph $G(C_j)$, the non-monochromatic 2-colouring of the vertices v_{j1}, v_{j2}, v_{j3} must be consistent with Lemma 4. By symmetry of $G(C_j)$ it is enough to consider only the case when v_{j3} is coloured with colour 1 and v_{j1}, v_{j2} are coloured with colour 2. Then the vertices a, b must be coloured with colour 1 and the vertices c, d must be coloured with colour 2 and we obtain the acyclic $(\mathcal{S}_2, \mathcal{S}_2)$ -colouring of the graph $G(C_j)$. \square

From the above proof Lemma 7 follows.

Lemma 7 *In any acyclic $(\mathcal{S}_2, \mathcal{S}_2)$ -colouring of the graph $G(C_j)$ for every vertex v_{ji} , where $i = 1, 2, 3$, the colour class which contains the vertex v_{ji} contains also exactly two neighbours of v_{ji} .*

Now let us consider the graph H .

Lemma 8 *In every acyclic $(\mathcal{S}_2, \mathcal{S}_2)$ -colouring of the graph H , either the vertices $\{a, b, c, j, k, n, o, p, r\}$ or the vertices $\{a, b, c, j, l, n, o, r, s\}$ belong to the same colour class.*

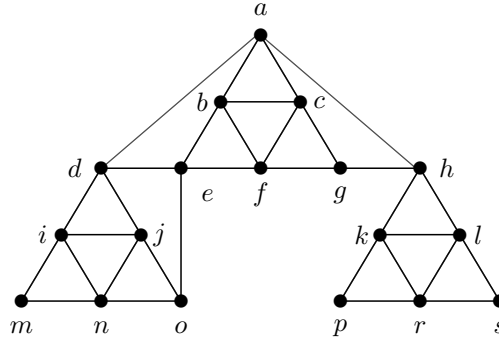


Fig. 8: The graph H

Proof: First, let us consider an induced subgraph H' of the graph H where $V(H') = \{a, b, c, d, e, f, g, h\}$. The graph B is an induced subgraph of H' , so the vertices a, b, c, e, f, g must be coloured in accordance with Lemma 4. Thus suppose that the vertices e, b, f (f, g, c) are coloured with colour 1 and the vertices a, c, g (a, b, e) are coloured with colour 2. That implies that the vertex d (h) must be coloured with colour 2. Now the vertex a has two neighbours coloured with colour 2, so the vertex h (d) must be coloured with colour 1. But now the vertices a, b, c, f, g, h (a, b, c, d, e, f) induce an alternating cycle. It is easy to see that if we colour the vertices a, b, c with colour 1, we must colour all the other vertices with colour 2. Furthermore this colouring defines the only acyclic $(\mathcal{S}_2, \mathcal{S}_2)$ -colouring of the graph H' .

It is obvious that the colouring of the graph H' determines the colouring of the graph H . One can see that because the vertex e has two neighbours coloured with colour 2 then the vertex o must be coloured with colour 1. Furthermore from the fact that the vertex d is coloured with colour 2 and the vertex o is coloured with colour 1 from Lemma 4 it follows that the vertices j, n must be coloured with colour 1 and the vertices i, m must be coloured with colour 2. The remaining part of the graph can be coloured in both ways. Either we colour the vertices k, p, r with colour 1 and the vertices l, s with colour 2 or we colour the vertices r, l, s with colour 1 and the vertices k, p with colour 2. In this way we obtain the acyclic $(\mathcal{S}_2, \mathcal{S}_2)$ -colouring of the graph H . \square

On the basis of the graph H we create the graph F (see Fig. 9).

Lemma 9 *The graph F has an acyclic $(\mathcal{S}_2, \mathcal{S}_2)$ -colouring and maximum degree of F is 4.*

Lemma 10 *In all acyclic $(\mathcal{S}_2, \mathcal{S}_2)$ -colourings of F the vertices x and x' are coloured differently from the vertex a .*

The proof of the above lemma follows directly from Lemma 8.

Finally, let us consider the graph $G(x_i)$ which we create as it is shown in Figure 10. From Lemma 10 the next one follows.

Lemma 11 *In every acyclic $(\mathcal{S}_2, \mathcal{S}_2)$ -colouring of the graph $G(x_i)$ for $i = 1, \dots, n$, $k = 1, \dots, m$ the vertices x_{ik} belong to the same colour class.*

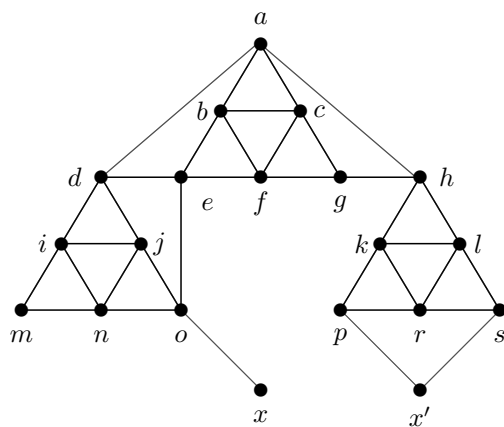


Fig. 9: The graph F

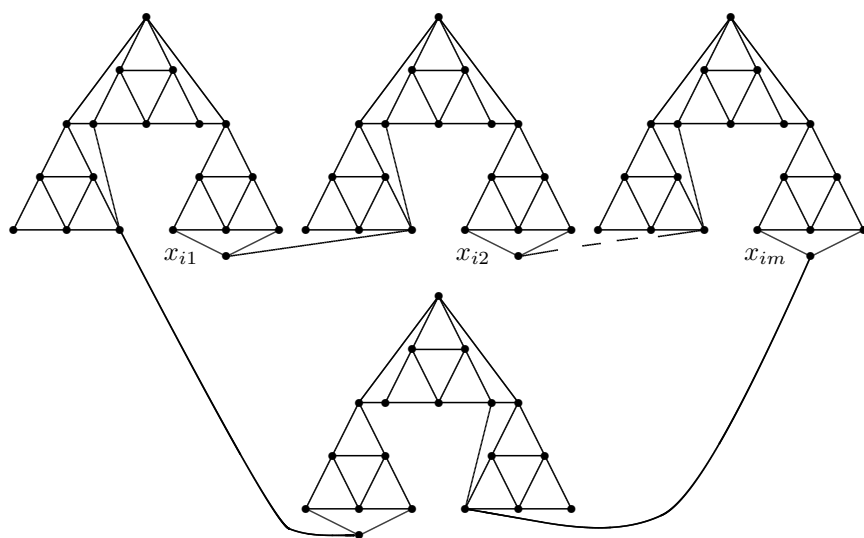


Fig. 10: The graph $G(x_i)$

To determine the complexity of the problem to decide if a given graph $G \in \mathcal{S}_4$ has an acyclic $(\mathcal{S}_2, \mathcal{S}_2)$ -colouring we will use the 3NN-SAT problem. The NP-completeness of 3NN-SAT was proved in [6]

Proof of Theorem 4: Clearly our problem is in NP. In our proof we will make a polynomial-time reduction from the 3NN-SAT problem, which belongs to the class NP-c, to our problem. Let $\mathcal{C} = \{C_1, \dots, C_m\}$ be a set of clauses and let $\mathcal{V} = \{x_1, \dots, x_n\}$ be a set of Boolean variables. Furthermore, $C_j \subseteq \mathcal{V}$ and for $j = 1, 2, \dots, m$ $C_j = (c_{j1}, c_{j2}, c_{j3})$. In 3NN-SAT we ask if there is a truth assignment such that in each clause there exist at least one true variable and at least one false variable. Note that there are no negative variables. Given an instance of 3NN-SAT we create an instance of our problem, *i.e.*, the graph G in the following way. For each clause we create the graph $G(C_j)$ and for each variable $x_i \in \mathcal{V}$ we create the graph $G(x_i)$. To obtain the whole graph G we have to connect the graphs $G(C_j)$ and $G(x_i)$. To do that for $i = 1, \dots, n$, $k = 1, \dots, m$, $p = 1, 2, 3$ we add an edge $x_{ik}v_{kp}$, where $x_{ik} \in V(G(x_i))$ and $v_{kp} \in V(G(C_j))$, if and only if the variable x_i is c_{kp} . From Lemma 7 and the construction of the graph G a further Lemma follows.

Lemma 12 *In every acyclic $(\mathcal{S}_2, \mathcal{S}_2)$ -colouring of the graph G for $j = 1, \dots, m$ and $p = 1, 2, 3$ the vertex $v_{jp} \in V(G(C_j))$ has exactly one neighbour x_{ij} in exactly one graph $G(x_i)$ where $1 \leq i \leq n$ and moreover x_{ij} belongs to a different colour class than v_{jp} .*

Let us suppose that the 3NN-SAT problem has a solution. We obtain an acyclic $(\mathcal{S}_2, \mathcal{S}_2)$ -colouring of the graph G in the following way. For each true variable x_i we colour every vertex $x_{ik} \in V(G(x_i))$ with colour 1 and for each false variable x_i we colour every vertex $x_{ik} \in V(G(x_i))$ with colour 2 where $i = 1, \dots, n$, $k = 1, \dots, m$. We colour the neighbours of the vertices $x_{ik} \in V(G(x_i))$ in the graph $G(C_j)$ differently from x_{ik} . From Lemmas 5, 6, 8, 11 and 12 we have that such 2-colouring can be extended to an acyclic $(\mathcal{S}_2, \mathcal{S}_2)$ -colouring of the graph G .

Now suppose that the graph G has an acyclic $(\mathcal{S}_2, \mathcal{S}_2)$ -colouring. To obtain a solution of the 3NN-SAT problem we assign true value to every variable $x_i \in \mathcal{V}$ for which the corresponding vertex $x_{ik} \in V(G(x_i))$ is coloured with colour 1 where $i = 1, \dots, n$, $k = 1, \dots, m$. Furthermore we assign false value to every variable $x_i \in \mathcal{V}$ for which the corresponding vertex $x_{ik} \in V(G(x_i))$ is coloured with colour 2 where $i = 1, \dots, n$, $k = 1, \dots, m$. The correctness of this assignment follows from Lemmas 5, 11 and 12. \square

References

- [1] P. Boiron, E. Sopena, L. Vignal, *Acyclic improper colourings of graphs with bounded degree*, DI-MACS Series in Discrete Mathematics and Theoretical Computer Science, **49** (1999) 1–9.
- [2] O.V. Borodin, *On acyclic colorings of planar graphs*, Discrete Math. **25** (1979) 211–236.
- [3] O.V. Borodin, A.V. Kostochka, D.R. Woodall, *Acyclic colorings of planar graphs with large girth*, J. London Math. Soc. **60** (1999) 344–352.
- [4] M.I. Burstein, *Every 4-valent graph has an acyclic 5-coloring*, Soobšč. Akad. Gruzin. SSR **93** (1979) 21–24 (in Russian).
- [5] G. Fertin, A. Raspaud, *Acyclic coloring of graphs of maximum degree five: Nine colors are enough*, Information Processing Letters **105** (2008) 65–72.
- [6] M. R. Garey, D. S. Johnson, *Computers and Intractability, A Guide to the Theory of NP-Completeness*, W. H. Freeman and Company, New York, 1979.
- [7] B. Grünbaum, *Acyclic coloring of planar graphs*, Israel J. Math. **14** (1973) 390–412
- [8] A.V. Kostochka, *Upper bounds of chromatic functions of graphs*, Ph.D. Thesis, Novosibirsk, 1978 (in Russian).
- [9] S. Skulrattanakulchai, *Acyclic colorings of subcubic graphs*, Information Processing Letters **92** (2004) 161–167.